



STD – IV
MENTAL MATHS – 7

13 . 02 .2020

Read the questions carefully
and choose the correct
option.



1. How many centimetres are there in 10 metres?

- A) 1 cm
- B) 10 cm
- C) 100 cm
- D) 1000 cm



2. The basic standard unit of measurement of length is _____.

- A) kilometre
- B) metre
- C) centimetre
- D) millimetre



3. Complete the pattern.

11, 22, 33, 44 _____



A) 50

B) 55

C) 60


D) 65

4. Which is not a symmetric figure?


A)



B)



C)



D)





5. What will be the next number in the series ?

30, 35, 33, 38, 36, _____

A) 44

B) 40

C) 41

D) 43



6. How many 100 Baizas make one Omani Riyal?

A) 5

B) 10

C) 15

D) 20

7. 3,835 g is same as _____

A) 3 kg 835 g

B) 30 kg 835 g

C) 3 kg 385 g

D) 30 kg 385 g

8. Complete the pattern.

1, 3, 6, 10, 15, _____

A) 20

B) 21

C) 22

D) 23

9. In the figure, the given line will be a line of symmetry if the letter _____ is removed.




A) E

B) H

C) I

D) J



10. How many 25 baizas make two hundred baiza?

A) 2

B) 4

C) 6

D) 8



ANSWERS:

- 1. D
 - 2. B
 - 3. B
 - 4. A
 - 5. C
 - 6. B
 - 7. A
 - 8. B
 - 9. D
 - 10. D
- 